




New City Primary School



Celebration of children's work
February 2021




Art



Reception



Y2



Y5




Playground Rides

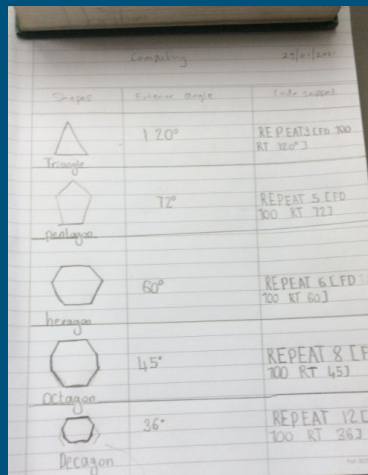


This is great [REDACTED] You have labelled each part of your bridge. Using a different coloured pen I would like you to go back and explain in detail why you have chosen these materials. Is it because of its durability? sturdiness? Think about this weeks key vocabulary.

Computing



Y1



Y4

Y6

| Item | Weight in grams | Price | Stock (start of week) | Stock (end of week) | Total stock sold |
|----------------------|-----------------|-------|-----------------------|---------------------|------------------|
| Apricots | 500 | £2.50 | 20 | 10 | 10 |
| Bacon | 300 | £1.69 | 80 | 75 | 5 |
| Baked potatoes | 800 | £2.69 | 80 | 10 | 70 |
| Beans | 415 | £0.85 | 100 | 40 | 60 |
| Black pudding | 250 | £0.92 | 10 | 8 | 2 |
| Bread | 800 | £0.84 | 200 | 198 | 2 |
| Broccoli | 750 | £0.67 | 40 | 38 | 2 |
| Burgers | 454 | £2.28 | 50 | 42 | 8 |
| Cat food | 750 | £3.25 | 100 | 85 | 15 |
| Cheese | 350 | £2.59 | 50 | 45 | 5 |
| Cheese and onion | 360 | £1.30 | 10 | 10 | 0 |
| Cheese slices | 250 | £1.75 | 20 | 20 | 0 |
| Cheesecake | 550 | £3.50 | 20 | 18 | 2 |
| Chicken pie | 550 | £3.00 | 20 | 13 | 7 |
| Chicken portions | 525 | £4.00 | 50 | 49 | 1 |
| Chilli cooking sauce | 450 | £1.76 | 100 | 50 | 50 |
| Chilli powder | 44 | £0.59 | 50 | 20 | 30 |
| Choco pops cereal | 720 | £3.00 | 50 | 38 | 12 |
| Chocolate bar | 110 | £1.00 | 200 | 154 | 46 |
| Chocolate biscuit | 207 | £1.00 | 100 | 59 | |

8

Good job using the formula to find the total stock sold. Make sure you calculate the price of the stock sold and click on "task 2" to calculate the average.

Reception

Year 6

Have you seen this wolf?
He has big ears and
big eyes also big teeth.
He has black and beige
fur and pointed carrot
shaped face. This wolf
has a fluffy shaped
tail, and a big fat round
belly, his behaviour is scary
and he is very good at
tricking people he is very
fast so he might escape
from you. If you see him call



07967899917

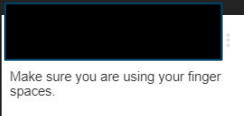

You don't know
where he will strike
next!

Kayleb 27-12

Wednesday 3rd February 2021

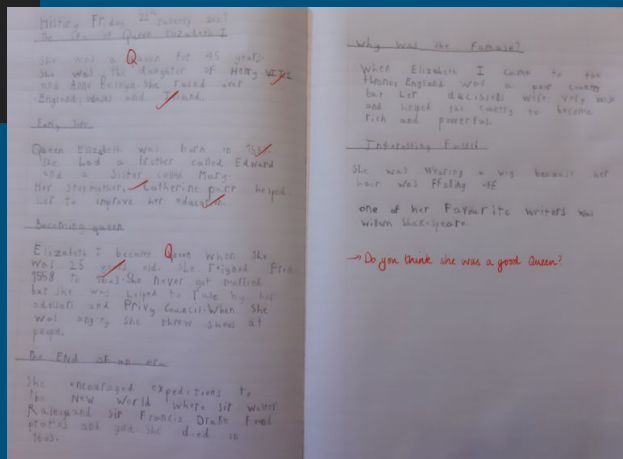
- I a girl
 - I live with her, two beautiful Seter and
 a brother.
 - my and have fun together
 - I want to go to the park
 - I don't got neither.
 - I want to go to school
 - I have no charge
 - I like to cook
 - I like to dress.
 - I want to go home at last
 - I dance when my older sister
 - I like to I run home
 - I like my husband my sister
 - I like on everyone.

History

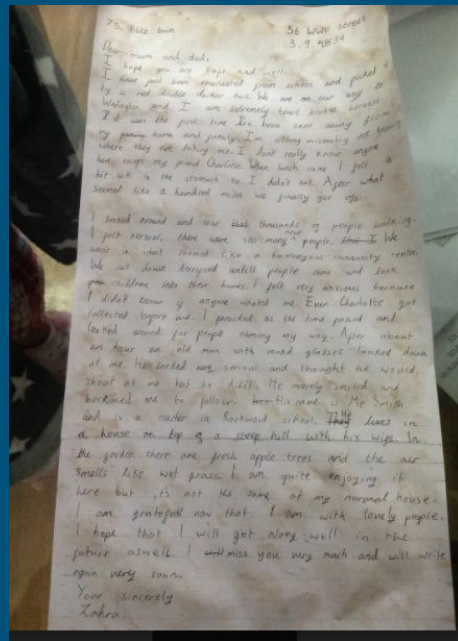


Y1 Timeline

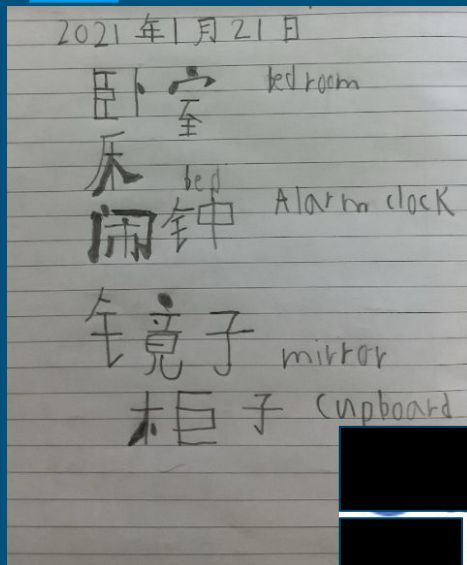
Y2 Researching a monarch



Y4 Recount as an evacuee



Mandarin



Y3

10:31 AM

Thank you and your work is amazing!

You did all Chinese characters correctly and your handwriting is beautiful. Well done!

2021/01/20
Jieri [festivals]

Chun jie means lunar in English, Chinese people think it's important because it means Chinese New Year.

Yan hua means to evolve in English, Chinese people think it's important because it helps us solve biological problems that impact our lives.

Dui lian means antithetical couplet in English, Chinese people think it's important because it is known as navigation.

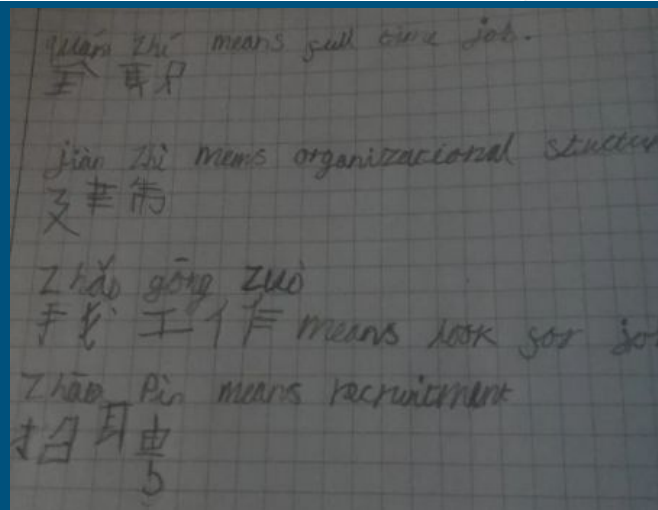
Jiao zi means dumplings in English, Chinese people think this is important because dumplings are a very traditional and famous food.

Y5

11:09 AM Jan 21
Spring Festival

11:09 AM Jan 21
Yan hua means fireworks.

11:12 AM Jan 21
I like your idea of navigation! and sometimes Chinese people think it is a symbol of Chinese New Year and it can welcome the good luck.



Y6

20

5 5 5 1 5

Remember, all parts are equal

I would rather have
5 packets of biscuits
with 12 in each because
 $5 \times 12 = 60$ and I like
more.

5 5 5 5


| items | Measurement |
|---------|-------------|
| pool | 9 |
| soup | 3 |
| glasses | 4 |
| picture | 4 |
| pen | 5 |

A photograph of a purple feather pen and a yellow beaded necklace. The pen has a large, fluffy purple feather at the top and a purple barrel. The necklace is made of small, round yellow beads. Both items are placed on a light-colored surface.


A pink, bottle-shaped container with a pump dispenser, decorated with a drawing of a flower and the text "My Pet". It is placed on a white surface next to a yellow, wavy-edged object.

A photograph showing a pair of dark-framed sunglasses and a light-colored hairbrush lying horizontally on a plain, light-colored surface. The sunglasses are on the right, and the hairbrush is on the left.

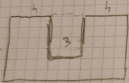
[illegible]




$$12 \times 4 + 4 \times 2 + 4 \times 2 = 12 \times 4 + 4 \times 2 = 24 + 8 = 32 \text{ m}^2$$



$$5 \times 6 + 3 \times 2 + 4 \times 2 = 30 + 6 + 8 = 44 \text{ m}^2$$



$$4 \times 4 + 4 \times 2 + 4 \times 2 = 16 + 8 + 8 = 32 \text{ m}^2$$



$$5 \times 5 + 5 \times 2 + 5 \times 2 = 25 + 10 + 10 = 45 \text{ m}^2$$

Y5
$$650 \div 100 = 6.5$$

1. $48-25=23$

2. $2536 - 458 = 2080$

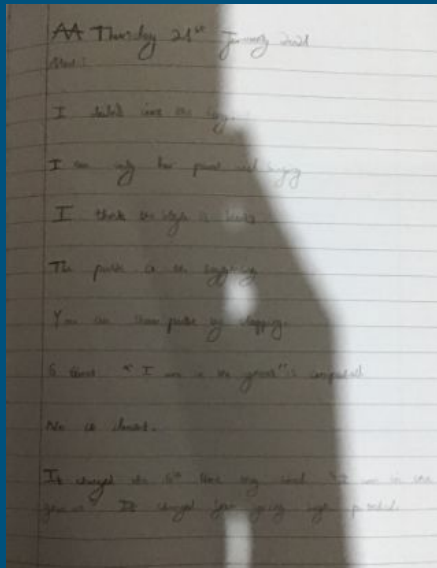
3. $1635 - 100 = 1535$

4. $8 - 32.75 = 24.75$

$$8 - 2.75$$
$$\begin{array}{r} 79 \\ \times 25 \\ \hline 395 \\ 1580 \\ \hline 1975 \end{array}$$

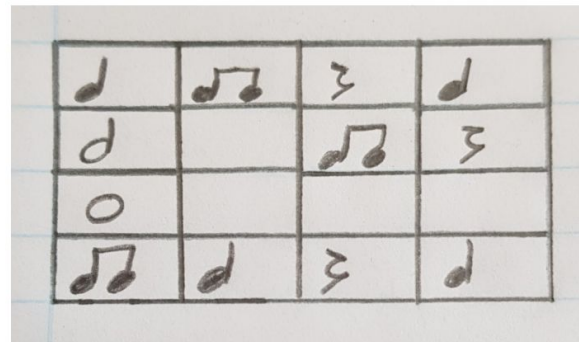
Use the inverse

Music




Y2

Friday 29th January 2021
Musical notation



Y5



Y6


PE



Reception

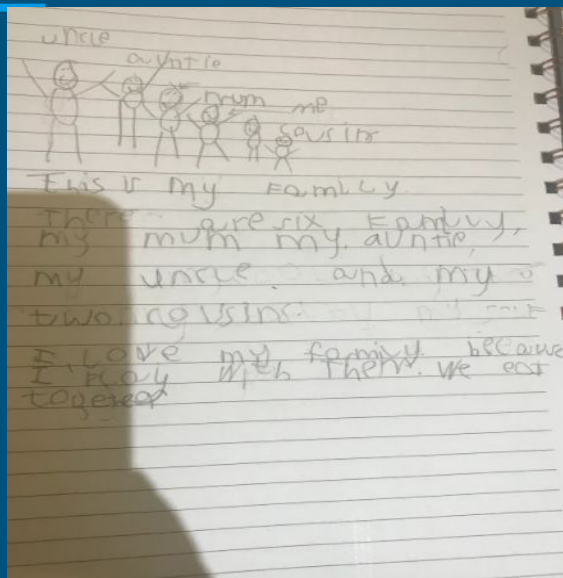


Y3




Y6

PSHE



Y1

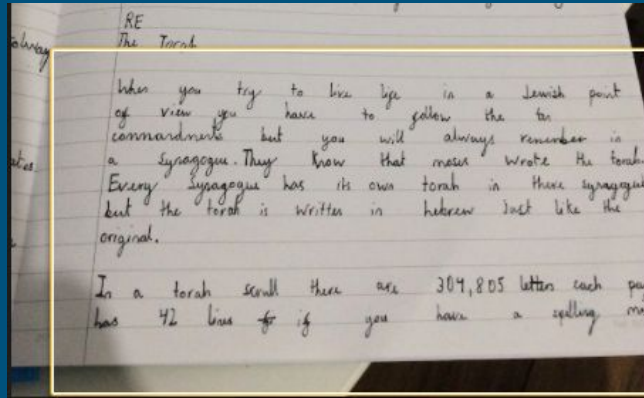


Y2



Y5

RE



A

7:47 AM Feb 4

Resolve

A detailed summary on how Takkah is similar to our library.

Y3

Monday 25th January 2021

RE - The set example by Jesus

Learning Objective - To consider the example set by Jesus to follow

Success Criteria - I recap my prior learnings about the teachings of Jesus.
I consider the example set by Jesus for Christians to follow.



I recognise this man to be Martin Luther King Jr, famous for his civil rights movement. 'I have a dream' one of the most famous quotes he made.



Mother Mary Teresa Bojaxhiu, honoured in the Catholic Church as Saint Teresa of Calcutta, was an Albanian-Indian Roman Catholic nun and missionary. She was born in Shkopje, then part of the Kosovo Vilayet of the Ottoman Empire.




William Wilberforce was a British politician, philanthropist, and a leader of the movement to abolish the slave trade. A native of Kingston upon Hull, Yorkshire, he began his political career in 1780, eventually becoming an independent Member of Parliament for Yorkshire.

Dear Diary,

Yesterday I went to Sunday school to learn about 3 great people whose legacy still lives on, Martin Luther King Jr, Mother Teresa and William Wilberforce. These 3 people had an impact on the world and all have something in common, civilisation.

Y5

Science



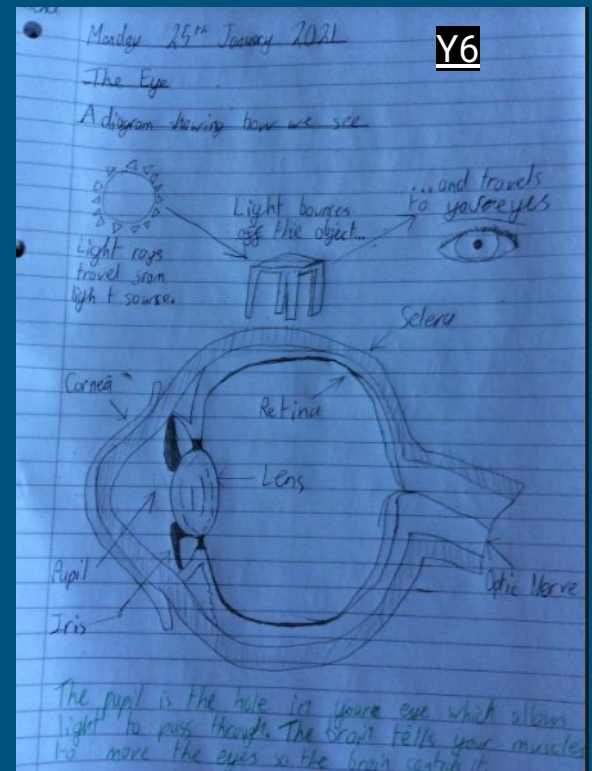
Reception

Monday 1st February 2021
Properties of Rocks

| Rocks | Observation |
|-----------|--|
| Sandstone | It can be scratched with a knife and is permeable. |
| Gneiss | It can be scratched with a knife and is impermeable. |
| Slate | It can be scratched with a knife and is impermeable. |
| Marble | It can be scratched with a knife and is impermeable. |

We can tell that a rock is permeable because it will let water pass through it.
All rocks are permeable and impermeable because they can be both.

Y3



Well done [redacted] This is a magnificent drawing of an eye and you have labelled it perfectly. Great understanding of what the pupil does.